
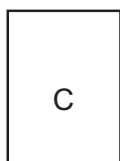
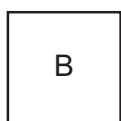
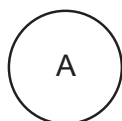




EXERCÍCIO  
-1

Marque A, B, C ou D, de acordo com a forma geométrica.



EXERCÍCIO  
-2

Desenhe um relógio no braço direito destas crianças:



EXERCÍCIO  
-3

Linhas paralelas:

A linha 1 está em paralelo com a linha 2.  
Desenhe linhas em paralelo com as linhas A e B.

